

# TIPS FOR ORDERING NUMBERS

**-The one with the most HUNDREDS is Bigger.**

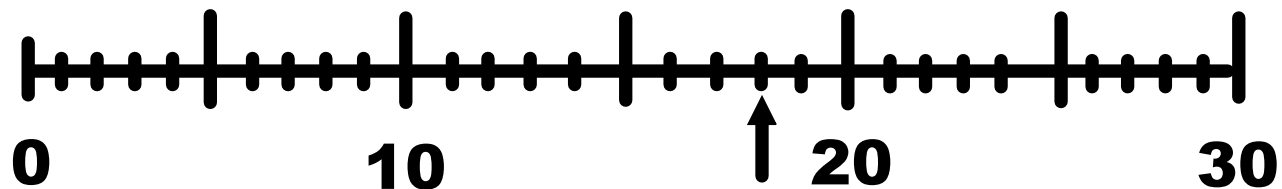
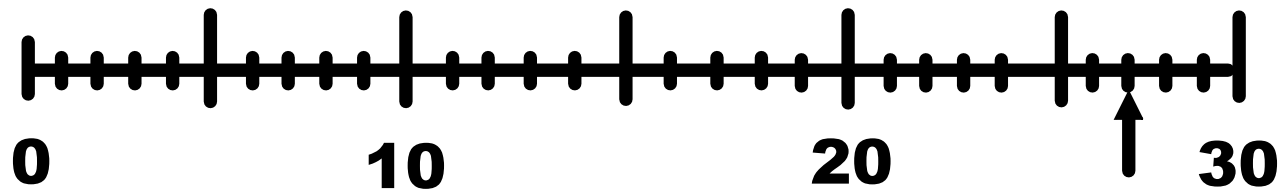
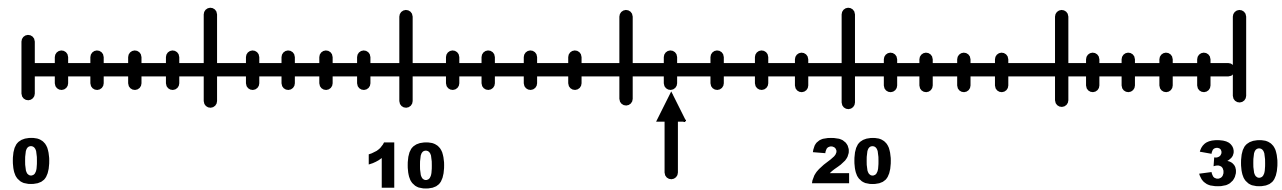
*if they are exactly the same, then*


**-The one with the most TENS is Bigger.**

*if they are exactly the same, then*

**-The one with the most ONES is Bigger.**

**A number is greater than 17 and less than 27.  
On which of the following number lines does an  
arrow point to the number described.**







What is the greatest three digit number that you can make using these balloons if the 6 is in the ones position?

**Which of the following is true regarding the sum of equation below?**



$$\begin{array}{r} + 487 \\ 296 \\ \hline \end{array}$$

- A) greater than 700 and less than 782.**
- B) greater than 783 and less than 800.**
- C) greater than 750 and less than 783**
- D) greater than 782 and less than 790.**

**A)**

Flats	Rods	Units
		


**B)**

Flats	Rods	Units
		

**C)**

$$100 + 50 + 4$$

**D)**



**Put the Numbers in order from greatest to least.**

Derek asked his sister Ashley to think of the number that is in his head. Ashley asked Derek to give him three clues. This is what Derek said:

- The sum of my digits is 20.
- My number is even.
- My number is less than 676.

Which of the following is his mystery number?

**A) 767**

**B) 678**

**C) 668**

**D) 669**