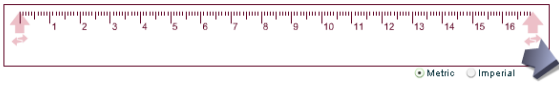


Measuring and Comparing Line Lengths With a Ruler Student Version.notebook



How much longer is the white line?



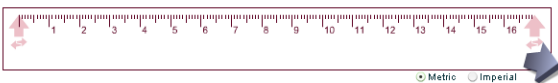
Apr 27-2:13 PM



How much shorter is the green line?



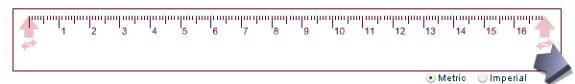
Apr 27-2:13 PM



What is the sum of the two line lengths?



Apr 27-2:13 PM



What is the product of the two line lengths?



Apr 27-2:13 PM

Measuring and Comparing Line Lengths With a Ruler Student Version.notebook

How much taller is the second sheep ?

3 cm

5 cm

A) 8 cm
B) 2 cm
C) 15 cm

Apr 27-2:13 PM

The unstretched elastic band measures 18 cm long. After it is stretched, it measures 73 cm long. How much longer did it get?



Apr 27-2:13 PM

Which set of lines have a sum length of 12 cm?

Set A

Set B

Apr 27-2:13 PM

Which set of lines have a difference of 5 cm in length?

Set A

Set B

Apr 27-2:13 PM